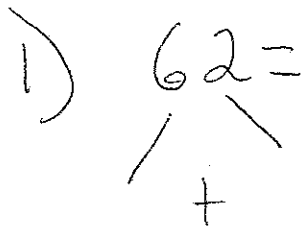
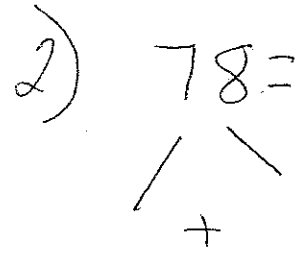
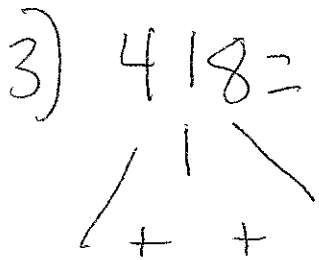
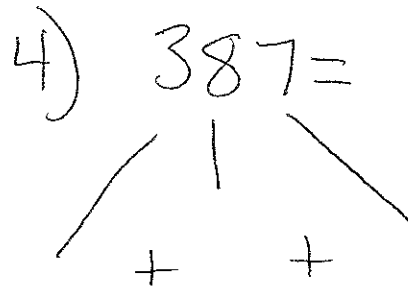


## Double

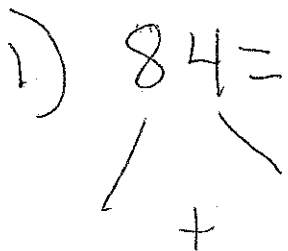
$$1) \quad 62 =$$


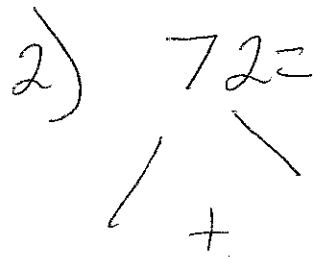
$$2) \quad 78 =$$


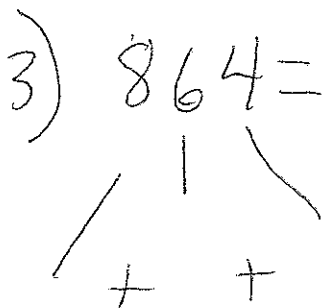
$$3) \quad 418 =$$


$$4) \quad 387 =$$


## Halve

$$1) \quad 84 =$$


$$2) \quad 72 =$$


$$3) \quad 864 =$$


$$4) \quad 974 =$$
